

Nom :

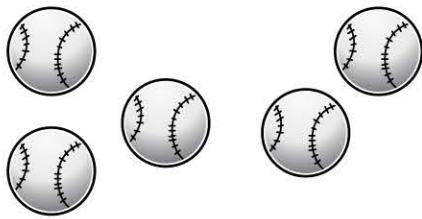
Appréciation

Date :




❖ LE NOMBRE 10

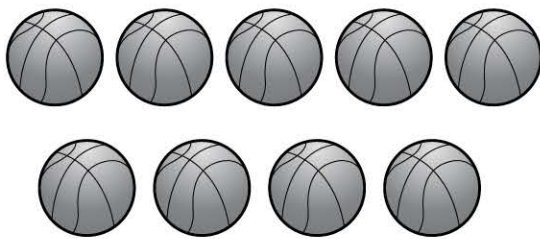
Dessine les balles qui manquent, puis complète les additions.




$$5 + \underline{\quad} = 10$$



$$8 + \underline{\quad} = 10$$




$$9 + \underline{\quad} = 10$$



$$3 + \underline{\quad} = 10$$



$$4 + \underline{\quad} = 10$$



$$7 + \underline{\quad} = 10$$