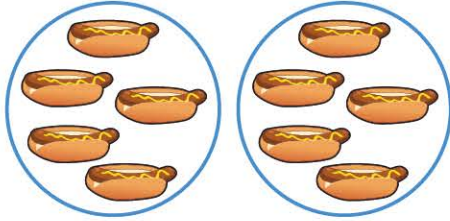
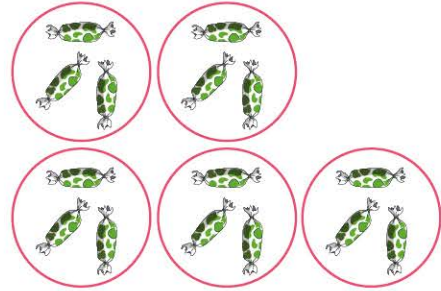


# Multiplication

Quelle écriture décrit le modèle?



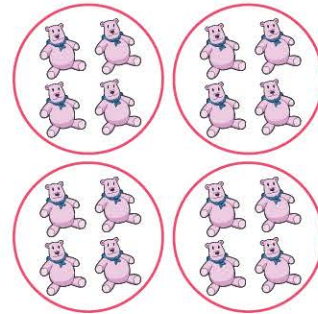
$3 \times 4$       $2 \times 5$       $2 \times 4$




$5 \times 3$       $6 \times 4$       $6 \times 3$



$3 \times 5$       $4 \times 4$       $3 \times 4$



$5 \times 7$       $4 \times 5$       $4 \times 4$



$5 \times 5$       $4 \times 1$       $5 \times 1$



$6 \times 6$       $5 \times 6$       $5 \times 5$



$1 \times 5$       $1 \times 4$       $1 \times 6$



$3 \times 3$       $4 \times 3$       $3 \times 5$